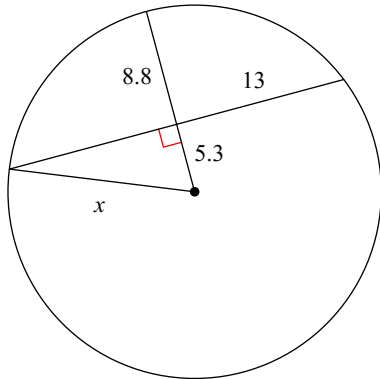


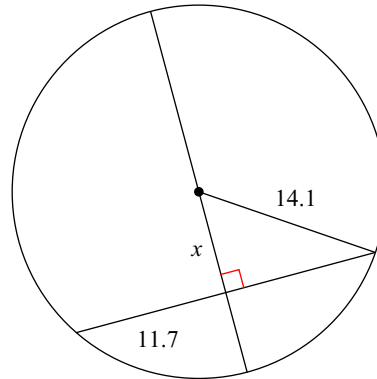
WS Practice Unit 10

Find the length of the segment indicated. Round your answer to the nearest tenth if necessary.

1)

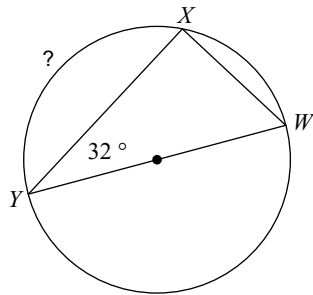


2)

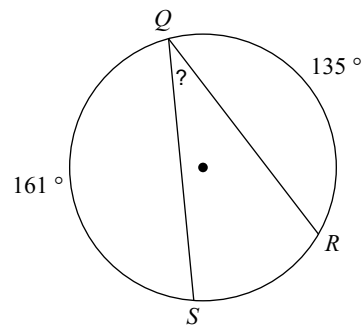


Find the measure of the arc or angle indicated.

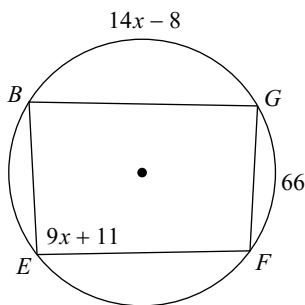
3)



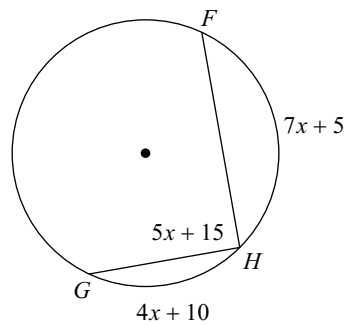
4)



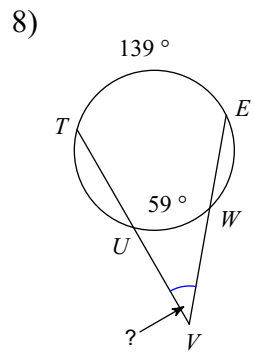
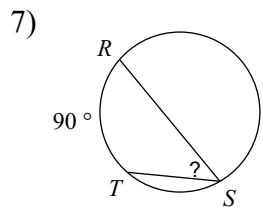
5) Find $m\widehat{BG}$



6) Find $m\widehat{HF}$



Find the measure of the arc or angle indicated. Assume that lines which appear tangent are tangent.



Solve for x . Assume that lines which appear tangent are tangent.

