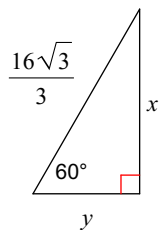


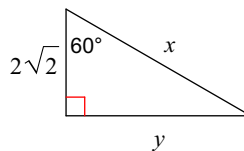
WS 9.2A Special Right Triangles

Find the missing side lengths. Leave your answers as radicals in simplest form.

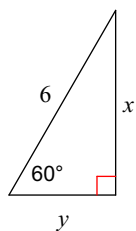
1)



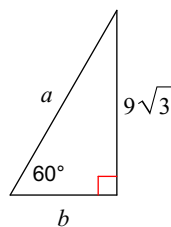
2)



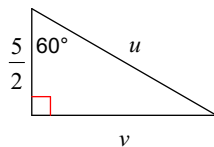
3)



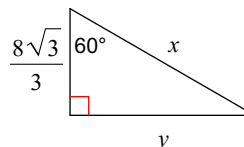
4)



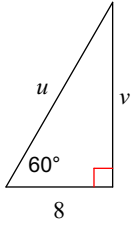
5)



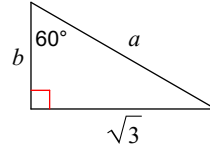
6)



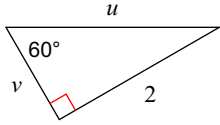
7)



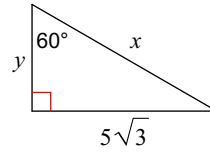
8)



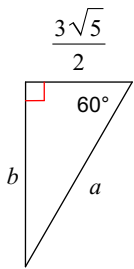
9)



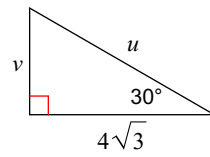
10)



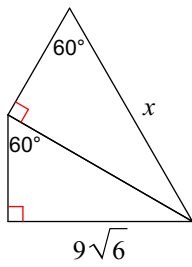
11)



12)



13)



14)

