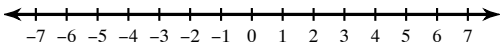


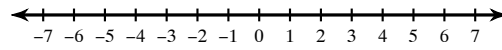
WS 2.1 Writing and Graphing Inequalities

Draw a graph for each inequality.

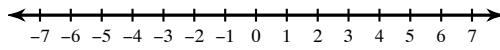
1) $v \geq -2$



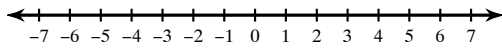
2) $-3 > x$



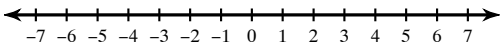
3) $m \leq -4$



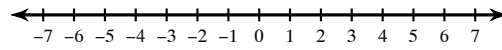
4) $5 \leq a$



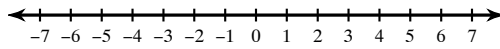
5) $x > 2$



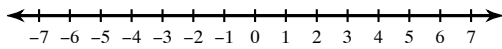
6) $p < 5$



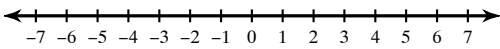
7) $v \leq -1$



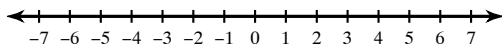
8) $-2 < n$



9) $m \geq -3$



10) $3 < n$



Write an inequality for each graph.

