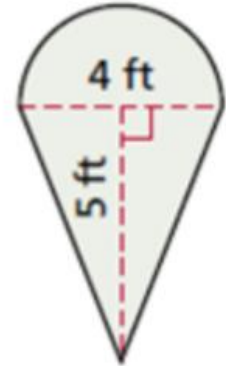


Name: _____ Date: _____ Block: _____

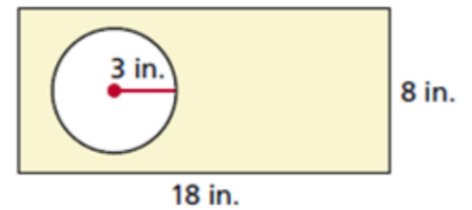
WS 11.3B – Area of Polygons and Composite Figures

Find the area of each composite figure. Leave your answers as exact and rounded to the nearest hundredth.

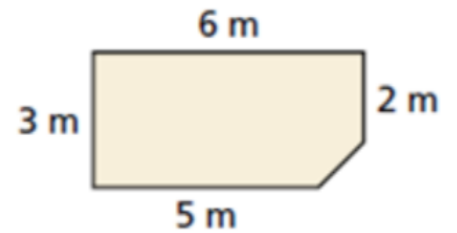
1.



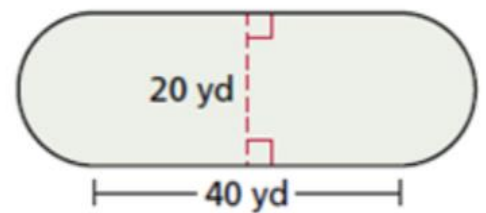
2.



3.

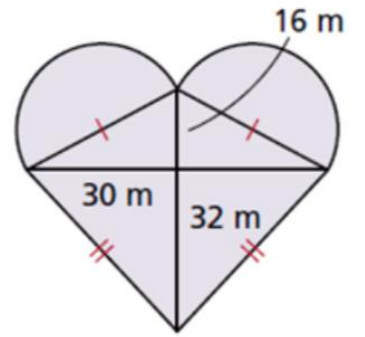


4.

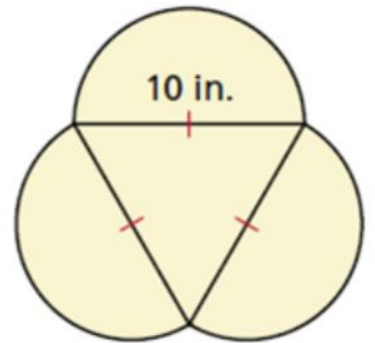


Find the area of the shaded regions. Leave your answers in terms of π .

5.



6.



7.

